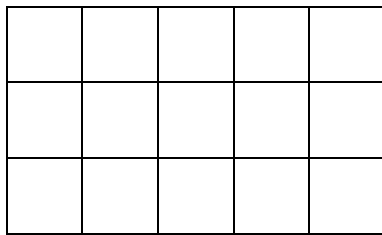
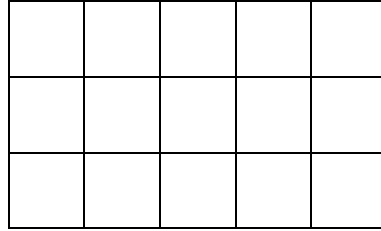


Addition of Fractions



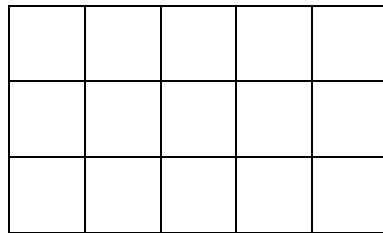
$\frac{2}{5}$

+



$\frac{1}{3}$

=



$\frac{?}{15}$

1. Shade the fractions
2. Show the result of the addition of the fractions by shading.
3. Create your own fractions and add them up.
4. Can you make a general rule of finding the sum of fractions?